

You MUST use good notation and show appropriate work.

Math 102
(Section 1.5A)

Name _____

1.5A Set Operations

1. Assume $A = \{1, 3, 5, 7\}$, $B = \{2, 5, 7, 8\}$ and $C = \{1, 3, 6\}$ are subsets of the universal set $U = \{1, 2, 3, 4, 5, 6, 7, 8, 9\}$. Determine each of the following (use good notation and circle your answers):

(a) $A \cup B$

(b) $A \cap B$

(c) $A \cap C$

(d) $A - B$

(e) $A' \cup B'$

(f) $A' \cap (B \cup C')$

(g) $(A \cap B) \cup (A \cap C)$

(h) $A' \cap B'$

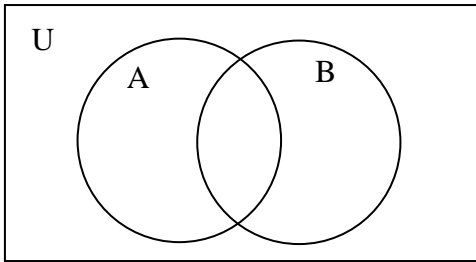
(i) $(A \cup B)'$

(j) $(A - C) \cup (B - C)$

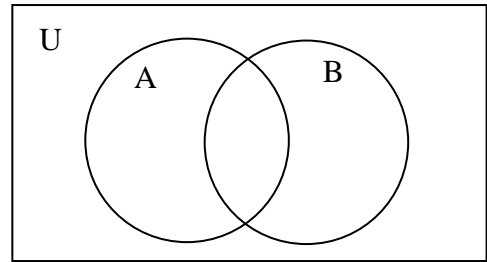
(k) Show that in this problem, $n(A \cup B) = n(A) + n(B) - n(A \cap B)$ is satisfied.

2. In each Venn Diagram below, shade the region associated with the given set.

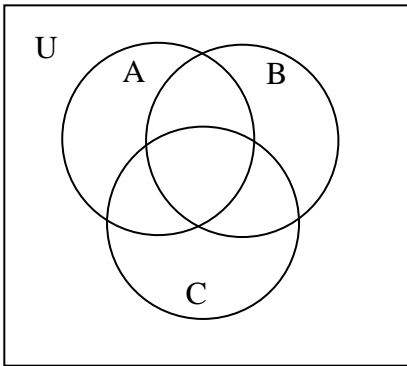
a) $(A \cup B)' - A$



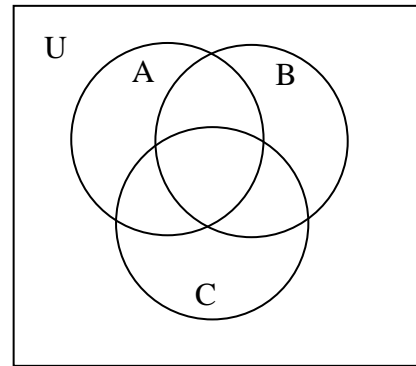
b) $A \cup (B \cup A)'$



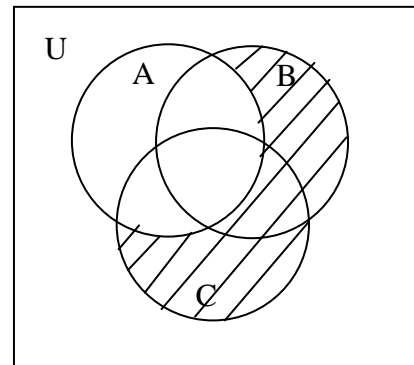
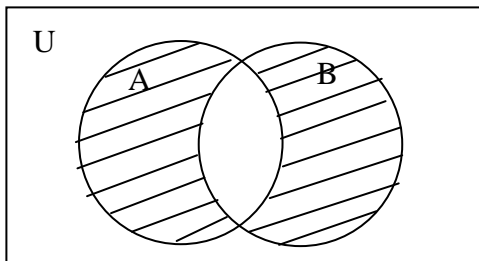
c) $A \cap (B \cup C)'$



d) $(B \cap A)' \cup (C - A)$



3. In each, name the shaded region using the letters A, B, C, and the set operations.



4. The **number of elements** is written in each region of the following Venn diagram. Find the following:

a. $n(A \cup B)$

b. $n(C')$

c. $n(U)$

d. $n((A \cup C) - (B \cup C))$

e. $n((A \cap C) - B)$

