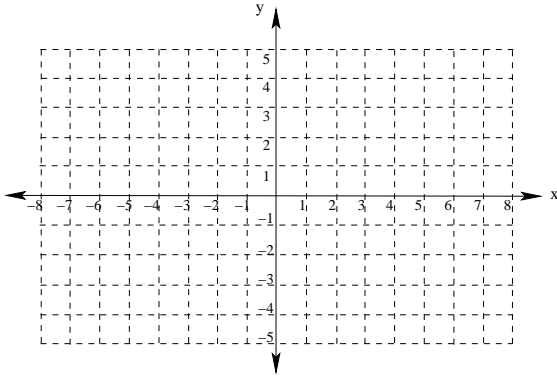


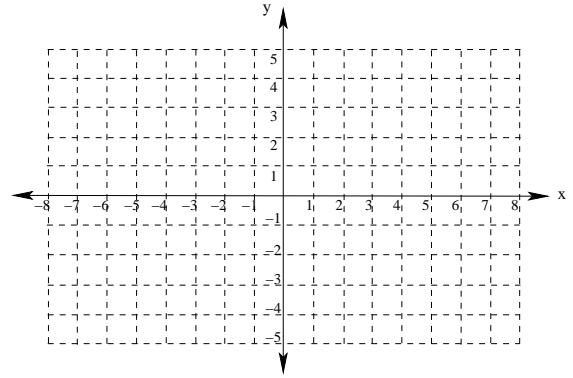
Instructions: Work the following problems in groups of 3-4 students. You will have about 20 minutes to complete the problems on this worksheet before we come back together to discuss them.

Draw the graph of each on the following equations in the space provided. Make sure to clearly label at least 4 points on each graph.

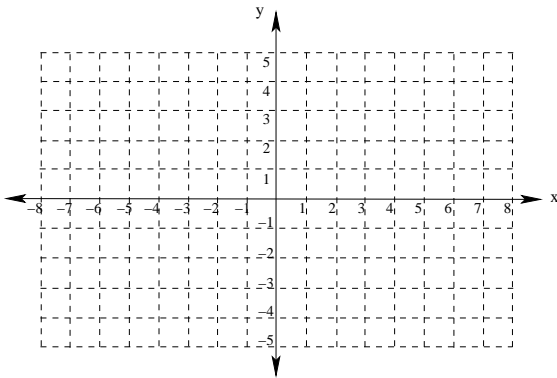
1. $y = 3x - 2$



3. $y = \sqrt{x - 3}$



2. $y = x^2 - 4$



4. $x^2 + y^2 = 4$

