

1. Find the derivative  $y' = \frac{dy}{dx}$  for each of the following:

(a)  $y = \pi^2 x + \pi x^2$

$$y' = \pi^2 + 2\pi x$$

(b)  $y = \cot x$

$$y' = -\csc^2 x$$

(c)  $y = \sqrt{x} \sec(x^2)$

$$y' = \frac{1}{2}x^{-\frac{1}{2}} \sec(x^2) + x^{\frac{1}{2}} \sec(x^2) \tan(x^2) \cdot 2x$$

$$y' = \frac{1}{2\sqrt{x}} \sec(x^2) + 2x\sqrt{x} \sec(x^2) \tan(x^2)$$

(d)  $y = 2 \tan^3(2x^3)$

$$y' = 6 \tan^2(2x^3) \cdot \sec^2(2x^3) \cdot 6x^2 = 36x^2 \tan^2(2x^3) \sec^2(2x^3)$$

(e)  $y = \frac{x^2 - 7 \cos(3x)}{x + \sin(3 - 2x)}$

$$y' = \frac{(2x + 21 \sin(3x))(x + \sin(3 - 2x)) - (x^2 - 7 \cos(3x))(1 - 2 \cos(3 - 2x))}{(x + \sin(3 - 2x))^2}$$

Note: I won't make you take time to simplify problems like this one on the exam.

(f)  $x^2y + 3xy - 5y^2 = 7$

Differentiating with respect to  $x$ :  $2xy + x^2y' + 3y + 3xy' - 10yy' = 0$

Then  $(x^2 + 3x - 10y)y' = -2xy - 3y$

Thus  $y' = \frac{-2xy - 3y}{x^2 + 3x - 10y}$

(g)  $\cos^2(xy) = 1$

Differentiating with respect to  $x$ :  $y' = 2 \cos(xy) \cdot (-\sin(xy)) \cdot (y + xy') = 0$

Then  $-2y \cos(xy) \sin(xy) - [2x \cos(xy) \sin(xy)]y' = 0$ ,

or  $-y'[2x \cos(xy) \sin(xy)] = 2y \cos(xy) \sin(xy)$

Thus  $y' = \frac{2y \cos(xy) \sin(xy)}{-2x \cos(xy) \sin(xy)} = -\frac{y}{x}$

2. Use the formal limit definition of the derivative to find the derivative of the following:

(a)  $f(x) = x^2 - 3x$

$$\begin{aligned} f'(x) &= \lim_{h \rightarrow 0} \frac{(x+h)^2 - 3(x+h) - x^2 + 3x}{h} = \lim_{h \rightarrow 0} \frac{x^2 + 2xh + h^2 - 3x - 3h - x^2 + 3x}{h} \\ &= \lim_{h \rightarrow 0} \frac{2xh + h^2 - 3h}{h} = \lim_{h \rightarrow 0} 2x + h - 3 = 2x - 3 \end{aligned}$$

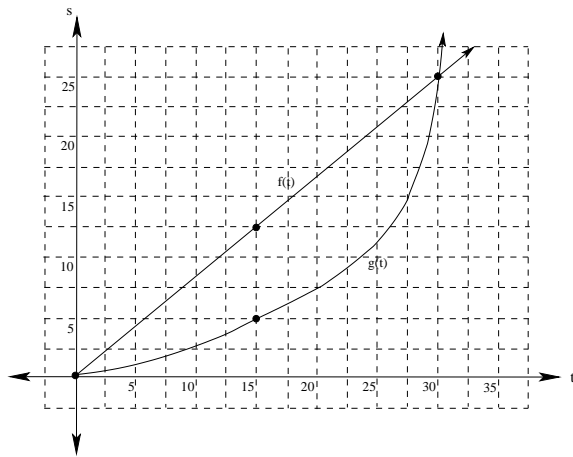
$$(b) f(x) = \frac{2}{x-3}$$

$$\begin{aligned} f'(x) &= \lim_{h \rightarrow 0} \frac{\frac{2}{x+h-3} - \frac{2}{x-3}}{h} = \lim_{h \rightarrow 0} \frac{\frac{2(x-3) - 2(x+h-3)}{(x+h-3)(x-3)}}{h} \\ &= \lim_{h \rightarrow 0} \frac{2x - 6 - 2x - 2h + 6}{(x+h-3)(x-3)h} \\ &= \lim_{h \rightarrow 0} \frac{-2h}{(x+h-3)(x-3)h} = \lim_{h \rightarrow 0} \frac{-2}{(x+h-3)(x-3)} = \frac{-2}{(x-3)^2} \end{aligned}$$

$$(c) f(x) = \sqrt{x-2}$$

$$\begin{aligned} f'(x) &= \lim_{h \rightarrow 0} \frac{\sqrt{x+h-2} - \sqrt{x-2}}{h} \cdot \frac{\sqrt{x+h-2} + \sqrt{x-2}}{\sqrt{x+h-2} + \sqrt{x-2}} \\ &= \lim_{h \rightarrow 0} \frac{x+h-2-x+2}{h(\sqrt{x+h-2} + \sqrt{x-2})} = \lim_{h \rightarrow 0} \frac{h}{h(\sqrt{x+h-2} + \sqrt{x-2})} = \frac{1}{2\sqrt{x-2}} \end{aligned}$$

3. The position of two cars, car  $A$  and car  $B$ , both starting side by side on a straight road, is given by  $f(t)$  and  $g(t)$ , where  $f(t)$  is the distance traveled car  $A$  in feet, and  $g(t)$  is the distance traveled car  $B$  in feet, and  $t$  is in minutes (see the graph below):



- (a) How fast is car  $A$  going at time  $t = 15$ ?

To find the speed of car  $A$  at time  $t = 15$ , we need to find the slope of the tangent line to  $f(t)$  when  $t = 15$ . From the graph,  $m = \frac{12.5}{15} = \frac{5}{6}$  feet per minute.

- (b) Find the average rate of change of car  $B$  on the time interval  $[0, 15]$ .

The average rate of change of car  $B$  on the time interval  $[0, 15]$  is given by the slope of the secant line to  $g(t)$ , which is given by  $v_{av} = \frac{5}{15} = \frac{1}{3}$  feet per minute.

- (c) Which car is traveling faster at time  $t = 15$ ?

We are comparing the instantaneous velocities of the two cars when  $t = 15$ . From the graph, we see that the tangent line to  $f(t)$  is steeper than the tangent line to  $g(t)$  when  $t = 15$ , so car  $A$  is going faster at that time.

- (d) Which car is traveling faster at time  $t = 30$ ?

We are comparing the instantaneous velocities of the two cars when  $t = 30$ . From the graph, we see that the tangent line to  $g(t)$  is steeper than the tangent line to  $f(t)$  when  $t = 30$ , so car  $B$  is going faster at that time.

(e) What can you say about the relative positions of the two cars at time  $t = 30$ ?

Since the cars have driven the same distance, they are still side by side.

4. Use the quotient rule to derive the formula for the derivative of  $\tan(x)$ .

Notice that  $f(x) = \tan x = \frac{\sin x}{\cos x}$

Then, using the quotient rule:

$$f'(x) = \frac{\cos x \cdot \cos x - \sin x \cdot (-\sin x)}{\cos^2 x} = \frac{\cos^2 x + \sin^2 x}{\cos^2 x} = \frac{1}{\cos^2 x} = \sec^2(x).$$

Thus  $\frac{d}{dx}(\tan x) = \sec^2 x$

5. Use the product rule to prove that  $D_x[f(x)g(x)h(x)] = f'(x)g(x)h(x) + f(x)g'(x)h(x) + f(x)g(x)h'(x)$

We'll use the product rule twice:

$$\begin{aligned} D_x[(f(x)g(x))h(x)] &= D_x[f(x)g(x)]h(x) + (f(x)g(x)) \cdot h'(x) \\ &= [f'(x)g(x) + f(x)g'(x)]h(x) + f(x)g(x)h'(x) = f'(x)g(x)h(x) + f(x)g'(x)h(x) + f(x)g(x)h'(x) \end{aligned}$$

□

6. If  $f(x) = \sqrt{3x - 5}$ , find the intervals where  $f(x)$  is continuous, and find the intervals where  $f(x)$  is differentiable.

Recall that  $f(x)$  is the square root of a polynomial, so it is continuous wherever it is defined. That is, whenever  $3x - 5 \geq 0$ , or when  $x \geq \frac{5}{3}$ .

Thus  $f(x)$  is continuous on  $[\frac{5}{3}, \infty)$

$$\text{Next, } f'(x) = \frac{1}{2}(3x - 5)^{-\frac{1}{2}}(3) = \frac{3}{2\sqrt{3x - 5}}$$

Then  $f'(x)$  is defined when  $3x - 5 > 0$ , or when  $x > \frac{5}{3}$ , so  $f(x)$  is differentiable on  $(\frac{5}{3}, \infty)$

7. If  $f(x) = 3x^4 - 5x^2 + 7x - 12$ , use differentials to approximate  $f(1.1)$

Let  $x = 1$  and  $\Delta x = .1$ . Notice that  $f'(x) = 12x^3 - 10x + 7$ , so  $f'(1) = 12 - 10 + 7 = 9$ , and  $f(1) = 3 - 5 + 7 - 12 = 10 - 17 = -7$

$$\text{Then } f(1.1) \approx f(1) + f'(1)\Delta x = -7 + 9(.1) = -7 + .9 = -6.1$$

8. Use differentials to approximate  $\sqrt{1.2}$ . How good is your approximation?

Let  $f(x) = \sqrt{x}$ . Then  $f'(x) = \frac{1}{2\sqrt{x}}$ .

Let  $x = 1$  and  $\Delta x = .2$ . Then, using the linear approximation formula:

$$f(1.2) \approx f(1) + f'(1)\Delta x = 1 + \frac{1}{2} \cdot (.2) = 1.1$$

Notice that using a calculator,  $\sqrt{1.2} \approx 1.095445$ , so if we believe our calculator, our approximation using the tangent line to  $f$  when  $x = 1$  is good to within about .004556.

9. Use differentials to estimate  $\sqrt[3]{9}$ . How good is your approximation?

Let  $f(x) = x^{\frac{1}{3}}$ ,  $x = 8$ , and  $\Delta x = 1$ .

$$\text{Then } f'(x) = \frac{1}{3}x^{-\frac{2}{3}} = \frac{1}{3x^{\frac{2}{3}}}.$$

$$\text{Therefore, } f(8) = \sqrt[3]{8} = 2, \text{ and } f'(8) = \frac{1}{3 \cdot 8^{\frac{2}{3}}} = \frac{1}{3(4)} = \frac{1}{12}.$$

$$\text{Thus } f(9) \approx f(8) + f'(8)\Delta x = 2 + \frac{1}{12} = \frac{25}{12} \approx 2.08333$$

Notice that  $\sqrt[3]{9} \approx 2.08008$ , so our approximation is within 33 ten-thousandths.

10. Suppose helium is being pumped into a spherical balloon at a rate of 4 cubic feet per minute. Find the rate at which the radius is changing when the radius is 2 feet.

Recall that the volume of a sphere of radius  $r$  is given by  $V = \frac{4}{3}\pi r^3$ . In the situation described, both  $V$  and  $r$  are functions of time  $t$  in minutes.

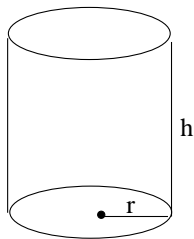
Then, differentiating implicitly,  $\frac{dV}{dt} = 4\pi r^2 \frac{dr}{dt}$ .

We also know that  $\frac{dV}{dt} = 4 \frac{ft^3}{min}$  and  $r = 2$  feet.

Thus  $4 = 4\pi(4) \frac{dr}{dt}$ , so  $\frac{dr}{dt} = \frac{4}{16\pi} = \frac{1}{4\pi} \frac{ft}{min}$ .

11. Dr. Von Klausen has just invented a shrink ray and decides to try it out on a test object: a cylinder whose height is twice its radius. The shrink ray has been calibrated so that the proportions of the cylinder remain the same throughout the test. A few seconds into the test, the radius of the cylinder is decreasing at 2 inches per second, and the height is 4 inches. At what rate is the volume of the cylinder changing at that time? (Be sure to include units in your answer)

Recall that the volume of a cylinder is given by:  $V = \pi r^2 h$

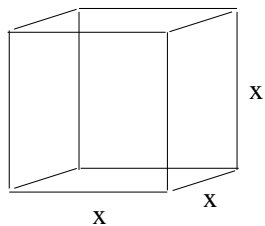


Here,  $h = 2r$  and  $h = 4$ , so  $r = 2$ . Also,  $\frac{dr}{dt} = -2$  inches per second.

Substituting  $h = 2r$  into the main volume equation, we get  $v = 2\pi r^3$ .

Differentiating implicitly:  $\frac{dV}{dt} = 6\pi r^2 \frac{dr}{dt} = 6\pi(2^2)(-2) = -48\pi$  cubic inches per second.

12. A company manufactures wooden cubes. Each side of the finished cubes are 5 inches long, with a maximum error of  $\pm 0.2$  inches per side. Use differentials to estimate the maximum error in the volume of the cube. Then, compare your estimate with the error in volume of a cube with largest possible volume manufactured within the given error tolerances.



The volume of a cube is given by  $V = x^3$ . Then  $dV = 3x^2\Delta x$  can be used to approximate the error in volume. Here,  $x = 5$  inches, and  $\Delta x = \pm 0.2$  inches.

Hence  $\Delta V \approx dV = 3x^2\Delta x = 3(5^2)(\pm 0.2) = \pm 15$  cubic inches.

A perfectly constructed cube would have a volume  $v = 5^3 = 125$  cubic inches.

Then, according to our estimate using differentials,  $110 \leq V \leq 140$  is the error range for the volume of the manufactured cubes.

In reality, the biggest possible cube would have sides all of length 5.2 inches, or a volume of  $(5.2)^3 = 140.608$  cubic inches. So our estimate for the maximum error is pretty close to the actual maximum error.

13. Find the equation of the tangent line to the graph of  $f(x) = \tan(4x)$  when  $x = \frac{3\pi}{16}$

$$f'(x) = 4 \sec^2(4x) = \frac{4}{\cos^2(4x)}. \text{ Therefore } f'\left(\frac{3\pi}{16}\right) = \frac{4}{\cos^2\left(\frac{12\pi}{16}\right)} = \frac{4}{\left(\frac{-\sqrt{2}}{2}\right)^2} = \frac{4}{\frac{1}{2}} = 8,$$

$$\text{and } f\left(\frac{3\pi}{16}\right) = \tan\left(\frac{3\pi}{4}\right) = -1.$$

Then the tangent line to  $f(x)$  when  $x = \frac{3\pi}{16}$  has slope 8 and goes through the point  $\left(\frac{3\pi}{16}, -1\right)$

Hence the tangent line has equation  $y + 1 = 8\left(x - \frac{3\pi}{16}\right)$  so  $y = 8x - \frac{3\pi}{2} - 1$

14. Find the equation of the tangent line to the graph of  $y = \sec(2x)$  when  $x = \frac{\pi}{6}$ .

$$y' = 2 \sec(2x) \tan(2x) = \frac{2 \sin(2x)}{\cos^2(2x)}$$

$$m = \frac{2 \sin\left(\frac{\pi}{3}\right)}{\cos^2\left(\frac{\pi}{3}\right)} = \frac{2\left(\frac{\sqrt{3}}{2}\right)}{\left(\frac{1}{2}\right)^2} = 4\sqrt{3}$$

$$y = \sec \frac{\pi}{3} = \frac{1}{\cos\left(\frac{\pi}{3}\right)} = \frac{1}{\frac{1}{2}} = 2$$

Therefore, the equation of the tangent line is given by:  $y - 2 = 4\sqrt{3}\left(x - \frac{\pi}{6}\right)$ ,

$$\text{or } y = 4\sqrt{3}x - \frac{2\sqrt{3}\pi + 6}{3}$$

15. Find the points on the graph of  $y = 2x^3 + 3x^2 - 72x + 5$  at which the tangent line is horizontal.

Let  $y = f(x)$ . Then  $f'(x) = 6x^2 + 6x - 72 = 6(x^2 + x - 12)$ , so the points at which the tangent line is horizontal occur when  $x^2 + x - 12 = 0$ , or when  $(x + 4)(x - 3) = 0$ , that is, when  $x = -4$ , and  $x = 3$ .

Notice that  $f(-4) = 2(-4)^3 + 3(-4)^2 - 72(-4) + 5 = 213$ , and  $f(3) = 2(3)^3 + 3(3)^2 - 72(3) + 5 = -130$

Hence the points on the graph of  $y = f(x)$  with horizontal tangent lines are:  $(-4, 213)$  and  $(3, -130)$ .

16. Find the equation of the tangent line to the graph of the relation  $x^2y + 3y^2 = 3x - 7$  at the point  $(2, -1)$

Differentiating implicitly:  $2xy + x^2y' + 6yy' = 3$ , so  $y'(x^2 + 6y) = 3 - 2xy$

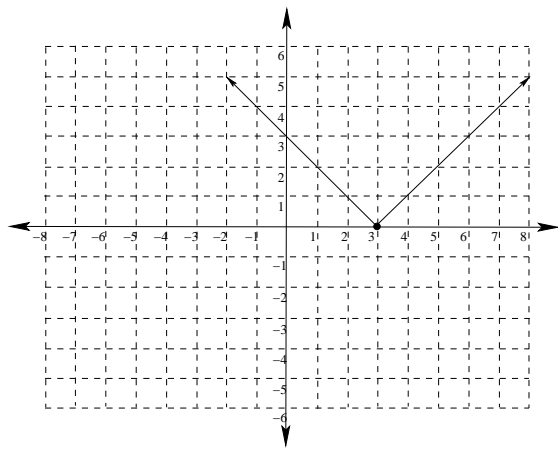
Thus  $y' = \frac{3 - 2xy}{x^2 + 6y}$ . Evaluating when  $x = 2$  and  $y = -1$ ,

$$m = \frac{3 - 2(2)(-1)}{2^2 + 6(-1)} = \frac{3 + 4}{-2} = -\frac{7}{2}.$$

Then the equation for the tangent line is given by:  $y + 1 = -\frac{7}{2}(x - 2)$ , or  $y = -\frac{7}{2}x + 6$ .

17. Draw the graph of a function  $f(x)$  that is continuous when  $x = 3$ , but is not differentiable when  $x = 3$ .

There are many possible examples. One possibility is:



18. Find  $g'(2)$  if  $h(x) = f(g(x))$ ,  $f(3) = -2$ ,  $g(2) = 3$ ,  $f'(3) = 5$ , and  $h'(2) = -30$ .

Using the Chain Rule,  $h'(x) = f'(g(x))g'(x)$ , so  $h'(2) = f'(g(2))g'(2) = f'(3)g'(2)$ .

Therefore,  $-30 = 5g'(2)$ , so  $-6 = g'(2)$ .

19. Given that  $f(2) = -3$ ,  $g(2) = 2$ ,  $f'(2) = \frac{1}{2}$ ,  $g'(2) = -5$ , and  $h(x) = f(g(x))$ .

Find the following:

(a)  $(f - g)'(2)$

$$= f'(2) - g'(2) = \frac{1}{2} - (-5)$$

$$= \frac{1}{2} + 5 = \frac{11}{2} = 5.5$$

(b)  $(fg)'(2)$

$$= f'(2)g(2) + f(2)g'(2) = \left(\frac{1}{2}\right)(2) + (-3)(-5)$$

$$= 1 + 15 = 16$$

(c)  $\left(\frac{f}{g}\right)'(2)$

$$= \frac{f'(2)g(2) - f(2)g'(2)}{[g(2)]^2}$$

$$= \frac{\left(\frac{1}{2}\right)(2) - (-3)(-5)}{2^2} = \frac{1 - 15}{4} = -\frac{7}{2}$$

(d)  $h'(2)$

$$= f'(g(2))g'(2) = f'(2)g'(2)$$

$$= \left(\frac{1}{2}\right)(-5) = -2.5$$

20. Find  $f^{(8)}(x)$  if  $f(x) = \sin(2x)$

Notice that  $f'(x) = 2 \cos(2x)$

Continuing in this fashion,  $f^{(8)}(x) = 2^8 \sin(2x) = 256 \sin(2x)$ .

21. Find  $f^{(13)}(x)$  if  $f(x) = x^{12} + 7x^5 - 3x^3 - 1$

Since the highest exponent is 12, and differentiation using the power rule lowers the exponent of each term by one, then  $f^{(13)}(x) = 0$ .