

Note: See the very last page to see the formulas that will be provided with the final exam.

1. Which of the following liquids would have the highest vapor pressure, factoring in both the impact of the substance and the temperature?

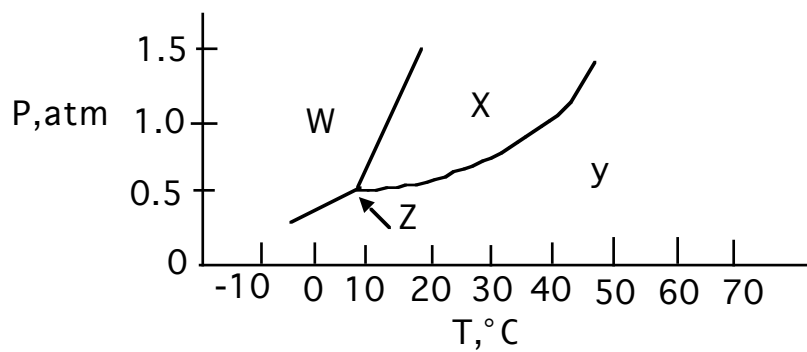
- $C_5H_{13}OH$ at $25^\circ C$
- $C_5H_{13}OH$ at $90^\circ C$
- $FeCl_3$ at $25^\circ C$
- $C_8H_{15}OH$ at $25^\circ C$
- $C_8H_{15}OH$ at $90^\circ C$

2. Which would have the highest melting point?

- CO_2
- H_2O
- $NaCl$
- CH_3Cl
- CH_3CH_2Br

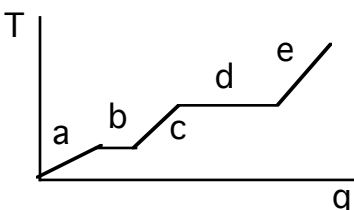
3. What is the melting point at 1.5 atm pressure for the substance described by the following phase diagram?

- $8^\circ C$
- $18^\circ C$
- $40^\circ C$
- $50^\circ C$

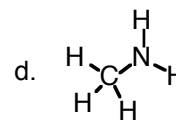
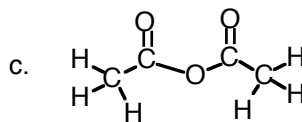
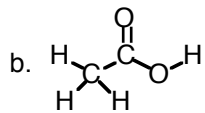
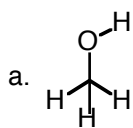


4. Region “d” on the heating curve shown (Temperature versus heat, “q”) corresponds to:

- a pure gas increasing in temperature
- a liquid increasing in temperature
- a solid increasing in temperature
- a solid melting
- a liquid boiling



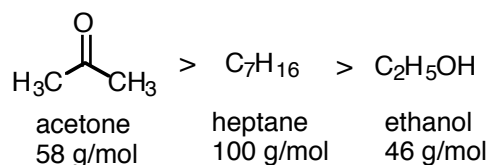
5. Which one of the following substances would not have hydrogen bonding as one of its intermolecular forces?



6. Rank the following in terms of increasing boiling point: KBr C₂H₅OH C₂H₆ He

- He < KBr < C₂H₅OH < C₂H₆
- KBr < C₂H₆ < C₂H₅OH < He
- He < C₂H₆ < C₂H₅OH < KBr
- KBr < C₂H₆ < He < C₂H₅OH
- C₂H₅OH < C₂H₆ < He < KBr

7. At room temperature, the vapor pressure pattern is acetone > heptane > ethanol. Which one of the following statements is FALSE:



- a substance with lower vapor pressure is held together by stronger binding forces
- ethanol has the lowest vapor pressure, and London force explains why
- ethanol has the lowest vapor pressure, and hydrogen bonding explains why, even though it has the weakest London force.
- The reason that heptane has a lesser vapor pressure than acetone is because heptane is heavier and has substantially greater London dispersion force, even though acetone has dipole-dipole interactions in its favor.

8. For the reaction $A + 2B + 3C \rightarrow \text{products}$, the rate law is: $\text{rate} = k[A]^2[B]^1$
Which of the following statements is false:

- the reaction is 3rd order overall
- the reaction is second order in [A]
- the reaction is third order in [C]
- the reaction is first order in [B]

9. Why does CH₃CH₂NH₂ dissolve readily in water but C₄H₁₀ does not?

- Hydrogen bonding between CH₃CH₂NH₂ and water is strong. But interactions between C₄H₁₀ and water are weaker than the water-water interactions that would need to be sacrificed in order to dissolve C₄H₁₀.
- C₄H₁₀ has strong hydrogen bonding with water.
- CH₃CH₂NH₂ has only induced dipole forces (London forces)
- C₄H₁₀ is much more polar than CH₃CH₂NH₂

10. Which relationship is true for solubility in water?

- a. $C_6H_{14} > NaCl$
- b. $C_{11}H_{23}NH_2 > C_3H_7NH_2$
- c. $CH_3OH > CHCl_3$
- d. $CH_3CCl_3 > CH_3CH_2OH$

11. Which of the following statements is false?

- a. When a solute is dissolved in water, the freezing point of water goes down
- b. A saturated solution contains dissolved solute in equilibrium with undissolved solid
- c. Dissolving a solid results in a decrease in entropy and will only occur if the dissolving is exothermic.
- d. Smaller gases have higher velocity at room temperature than do larger molecules.

12. What is the rate law for the reaction $A + 2B + C \rightarrow$ products:

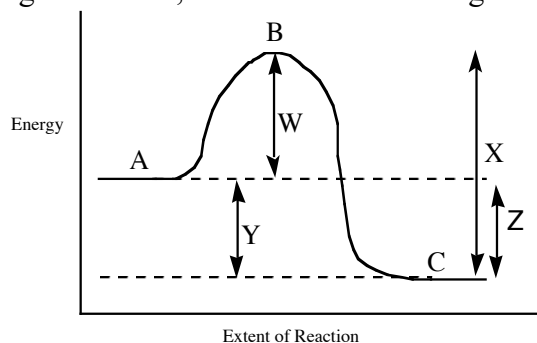
Initial [A]	Initial [B]	Initial [C]	rate
0.25	0.25	0.25	3.0
2.5	0.25	0.25	30.0
0.25	0.50	0.25	6.0
0.25	0.25	0.75	27.0

- a. $rate = k[A][B][C]^2$
- b. $rate = k[A][B]$
- c. $rate = k[A][B]^2[C]^3$
- d. $rate = k[A][B]^2[C]$

13. Substance X has a half life of 20 days. If a sample is originally 12 g, how much will be left after 80 days?

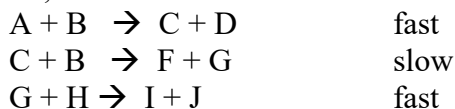
- a. 0.75 g
- b. 1.5 g
- c. 0.45 g
- d. 3.0 g
- e. none of the above

14. For the reaction diagram shown, which of the following statements is true?



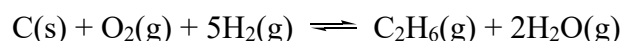
- Line W represents the ΔH for the forward reaction; point B represents the transition state
- Line W represents the activation energy for the forward reaction; point B represents the transition state
- Line Y represents the activation energy for the forward reaction; point C represents the transition state
- Line X represents the ΔH for the forward reaction; point B represents the transition state

15. Given the mechanism shown, what would be the rate law?




- rate = $k[\text{A}][\text{B}]$
- rate = $k[\text{A}][\text{B}]^2$
- rate = $k[\text{A}][\text{B}]^2[\text{C}]$
- rate = $k[\text{A}][\text{B}]^2[\text{C}][\text{G}][\text{H}]$
- none of the above

16. Which expression represents K correctly for the following reaction?



- $\frac{[\text{O}_2][\text{H}_2]^5}{[\text{C}_2\text{H}_6][\text{H}_2\text{O}]}$
- $\frac{[\text{C}_2\text{H}_6][\text{H}_2\text{O}]^2}{[\text{O}_2][\text{H}_2]^5}$
- $\frac{[\text{C}_2\text{H}_6][\text{H}_2\text{O}]}{[\text{C}][\text{O}_2][\text{H}_2]^5}$
- $\frac{[\text{C}_2\text{H}_6](2[\text{H}_2\text{O}])^2}{[\text{CO}](5[\text{H}_2])^5}$

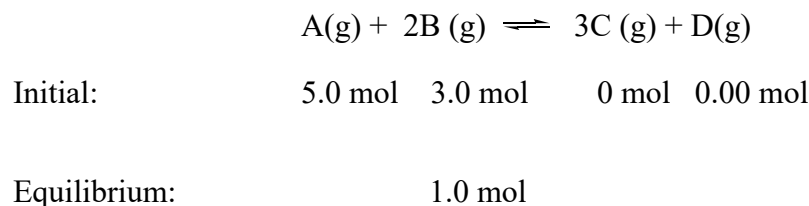
17. Calculate K for the following reaction if the equilibrium concentrations of B, C, and D are as shown.



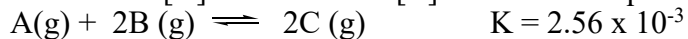
Equilibrium Concentrations (M): .50 M .20 M .40 M

- 0.0128
- 1.0×10^{-2}
- 25
- 63

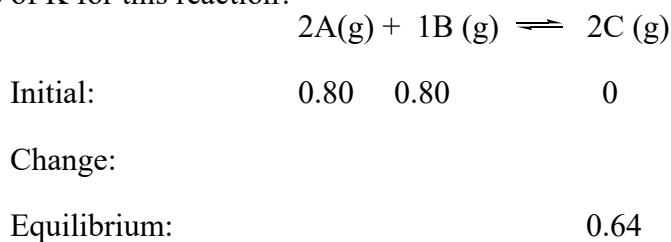
18. When 5 mol of A and 3 mol of B are placed in a container and allowed to come to equilibrium, the resulting mixture is found to contain 1 mol of B. What are the amounts of A, C, and D at equilibrium?



- a. 1.0 mol A, 3.0 mol C, 1.0 mol D
 b. 4.0 mol A, 3.0 mol C, 1.0 mol D
 c. 1.0 mol A, 6.0 mol C, 1.0 mol D
 d. 3.0 mol A, 2.0 mol C, 2.0 mol D
 e. 4.0 mol A, 3.0 mol C, 4.0 mol D
19. What is the equilibrium concentration of C if $[A] = 0.40 \text{ M}$ and $[B] = 0.15 \text{ M}$ at equilibrium?



- a. $3.2 \times 10^{-2} \text{ M}$
 b. $8.0 \times 10^{-4} \text{ M}$
 c. 0.20 M
 d. 0.10 M
 e. $4.8 \times 10^{-3} \text{ M}$
20. 0.80 mol of A and 0.80 mol of B are placed in a 1.00 L flask and allowed to reach equilibrium. (There is no C at first.) After reaching equilibrium, the flask is found to contain 0.64 mol of C. What is the value of K for this reaction?

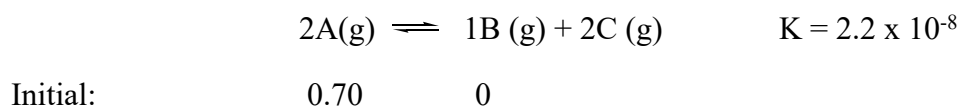


- a) 11
 b) 4.0
 c) 33
 d) 6.1
21. Given: $2A(g) \rightleftharpoons 1B(g) + 2C(g) \quad \Delta H^\circ = -69 \text{ kJ} \quad K = 1 \times 10^{-6}$

If the above reactants and products are contained in a closed vessel and the reaction system is at equilibrium, the number of moles of B can be increased by

- a. removing some C from the system.
 b. removing some A from the system.
 c. decreasing the size/volume of the reaction vessel.
 d. increasing the temperature of the reaction system.

22. What is the final concentration of C at equilibrium if the initial [A] concentration is 0.70M?



Equilibrium:

- a. 7.7×10^{-7}
- b. 1.6×10^{-3}
- c. 2.8×10^{-3}
- d. 6.2×10^{-4}
- e. none of the above

23. Calculate the pH of a solution that is 2.3×10^{-4} M in HNO_3 .

- a. 1.32
- b. 3.64
- c. 3.43
- d. 11.36
- e. none of the above

24. What is the $[\text{OH}^-]$ concentration of a solution with $\text{pH}=9.18$?

- a. 5.6×10^{-10} M
- b. 4.6×10^{-6} M
- c. 1.51×10^{-5} M
- d. 4.8×10^{-4} M
- e. none of the above

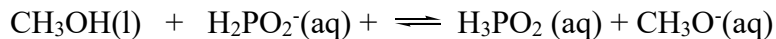
25. Calculate the pH of 0.20 M weak acid HA, $K_a = 1.5 \times 10^{-8}$.

- a. 3.29
- b. 4.26
- c. 6.59
- d. 10.71
- e. none of the above

26. An 0.60 M solution of weak acid HZ has a pH of 4.28. What is the value of K_a for HZ?

- a. 5.2×10^{-3}
- b. 4.6×10^{-9}
- c. 2.8×10^{-5}
- d. 1.9×10^{-12}
- e. none of the above

27. Which function as bases in the following equilibrium?

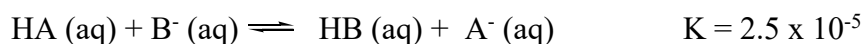


- a. H_2PO_2^- and CH_3O^-
- b. H_2PO_2^- and CH_3OH
- c. H_3PO_2 and CH_3O^-
- d. CH_3OH and H_3PO_2

28. Which of the following statements is true relative to NaBr , KN_3 , NH_4NO_3 , and CrBr_3 .

- a. NH_4NO_3 would give an acidic solutions; NaBr and KN_3 would give neutral solutions
- b. NaBr and CrBr_3 would give neutral solutions; and KN_3 would give a basic solution
- c. NH_4NO_3 , and CrBr_3 would give acidic solutions; NaBr and KN_3 would give basic solutions
- d. NH_4NO_3 , and CrBr_3 would give acidic solutions and KN_3 would give a basic solution

29. For the reaction shown, which of the following statements would be false?



- a) The equilibrium is reactant favored
- b) B^- anion is the weakest base present
- c) A^- anion is the strongest base present
- d) HA is the strongest acid present
- e) The solution will contain more HA than HB at equilibrium

30. Which of the following would give a basic solution when dissolved in water?

- a. HNO_2
- b. Na_2CO_3
- c. NaCl
- d. CrCl_3

31. When the following chemicals are mixed, each in 1 liter of water, which would give an acidic pH at the end?

- a) 1 mole of NaCN and 1 mole of HCl
- b) 1 mole of HCN and 1 mole of NaOH
- c) 1 mole of HCl and 1 mole of NaOH
- d) 1.5 mole of KOH and 1 mole of HCl

32. K_a for weak acid HZ is 2.8×10^{-5} . The pH of a buffer prepared by combining 50.0 mL of 1.00 M NaZ and 22.0 mL 1.00 M HZ is

- a) 4.19
- b) 4.55
- c) 4.91
- d) 5.14
- e) none of the above

33. Consider a solution that contains 0.50 moles of HN_3 and 0.50 moles of NaN_3 in 1.0 L of water. If 0.15 mol of HNO_3 is added to this buffer solution, the pH of the solution will get slightly _____. The pH does not change more drastically because the HNO_3 reacts with the _____ present in the buffer solution.
- higher, NaN_3
 - higher, HN_3
 - lower, NaN_3
 - lower, HN_3
34. When placed in 1 L of water, which of the following combinations would give a buffer solution? (Remember, in some cases they might react with each other...)
- 0.5 mol HF and 0.5 mol NaF
 - 1 mol HCl and 0.5 mol NaF
 - 0.5 mol HCl and 1.0 mol NaF
 - 0.5 mol HCl and 1.0 mol NaOH
- 1 only
 - 1 and 2 only
 - 1 and 3 only
 - 3 and 4 only
 - all would give buffer solutions
35. What is the pH when 40 mL of 1.0 M HCl is added to 80 mL of 0.5 M NaZ? (HZ has $K_a = 2.6 \times 10^{-6}$)
- 2.94×10^{-3}
 - 4.59
 - 7.00
 - 3.03
 - none of the above
36. An initial pH of 3.5 and an equivalence point at pH 9.1 correspond to a titration curve for a
- strong acid to which strong base is added
 - strong base to which strong acid is added
 - weak acid to which strong base is added
 - weak base to which strong acid is added
37. What is the molarity of an HCl solution if 28 mL of this solution required 41 mL of 0.63 M NaOH to reach the equivalence point?
- 0.92 M
 - 0.43 M
 - 0.48 M
 - 1.3×10^{-4} M
 - none of the above

38. Suppose calcium sulfate has solubility of 2.5×10^{-4} mol/L when added to distilled water. Which of the following statements would be **false**?
- The solubility would **increase** at pH = 2 because the acid would react with the sulfate anion and pull the equilibrium to the right
 - The solubility of the calcium sulfate would **decrease** if $\text{Ca}(\text{NO}_3)_2$ was added to the solution
 - The solubility of the calcium sulfate would **decrease** if Na_2SO_4 was added to the solution
 - The solubility would **decrease** if the temperature was raised from room temperature to 80°C
39. The solubility of MX_2 is 9.1×10^{-7} mol/L. What is the K_{sp} of MX_2 ?
- 9.1×10^{-9}
 - 8.3×10^{-17}
 - 3.0×10^{-18}
 - 3.0×10^{-10}
 - none of the above
40. What is the solubility (in moles/L) of CuBr in a solution that also contains 0.020 M CuNO_3 (the latter is fully soluble). ($K_{\text{sp}} \text{CuBr} = 5.4 \times 10^{-9}$)
- 5.3×10^{-9}
 - 7.3×10^{-5}
 - 1.8×10^{-7}
 - 2.7×10^{-7}
 - none of the above
41. Under which conditions is a reaction sure to be **reactant-favored**?
- the reaction is **endothermic** and its ΔS is **negative**
 - the reaction is **endothermic** and its ΔS is **positive**
 - the reaction is **exothermic** and its ΔS is **negative**
 - the reaction is **exothermic** and its ΔS is **positive**
42. Which one of the following reactions would have a **positive** value for ΔS° ?
- $\text{C}_6\text{H}_{12}(\text{g}) + 9\text{O}_2(\text{g}) \rightarrow 6\text{CO}_2(\text{g}) + 6\text{H}_2\text{O}(\text{l})$
 - $\text{N}_2(\text{g}) + 3\text{H}_2(\text{g}) \rightarrow 2\text{NH}_3(\text{g})$
 - $\text{H}_2\text{O}(\text{l}) \rightarrow \text{H}_2\text{O}(\text{s})$
 - $\text{BaCO}_3(\text{s}) \rightarrow \text{BaO}(\text{s}) + \text{CO}_2(\text{g})$
 - none of the above
43. Calculate ΔS° (at 25°C in J/K) for the following reaction, given the standard entropies shown (in J/mol-K):
- | | | | | |
|---------------------|-------------------------|----------------------------------|-------------------------|-----------------------|
| | $2\text{A}(\text{g}) +$ | $\text{B}(\text{g}) \rightarrow$ | $3\text{C}(\text{l}) +$ | $3\text{D}(\text{g})$ |
| Standard entropies: | 187 | 186 | 78 | 131 |
- +120
 - +59
 - +67
 - 59

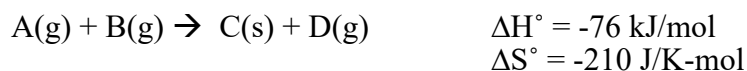
44. Consider the following reaction at 25°C.



What is the value of ΔG° for this reaction, in kJ, at 73°C, and would it be product-favored at 73°C?

- a) -4.0×10^4 kJ and reactant favored
- b) 28.8 kJ and reactant favored
- c) 131 kJ and reactant favored
- d) -91 kJ and product favored

45. For the following reaction, under which temperature circumstances (**in °C**) will it be **product-favored**?




- a) It will be product-favored at temperatures below 362 °C
- b) It will be product-favored at temperatures below 89 °C
- c) It will be product-favored at all temperatures
- d) It will be product-favored at temperatures above 43 °C
- e) It will be product-favored at temperatures below 316 °C

46. What is the oxidation number of Cl in HClO_3 ?

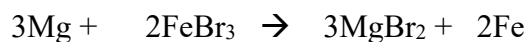
- a. +3
- b. +4
- c. +5
- d. +7
- e. none of the above

47. After balancing the following redox reaction, what is the coefficient for H_2O ?



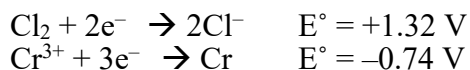
- a. 1
- b. 2
- c. 5
- d. 8
- e. none of the above

48. Which substance is the oxidizing agent in the following reaction?



- a. Fe°
- b. Mg^{2+}
- c. Fe^{3+}
- d. Mg°
- e. none of the above

49. Given the following reduction potentials, what would be the E° for a cell for a product-favored reaction involving the chemicals shown?

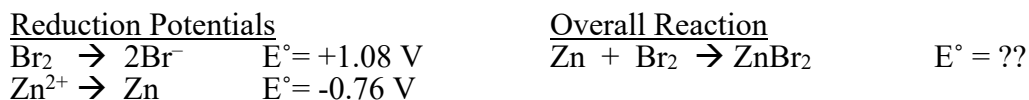


- a. 2.1V
b. 4.9 V
c. 0.58 V
d. 1.72 V
e. none of the above
50. Balance the reaction and determine E° for the following unbalanced reaction?

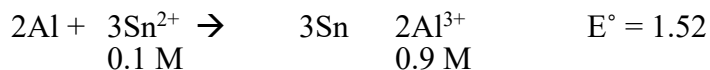


- a. +0.275 V
b. +0.490 V
c. +1.38 V
d. +2.55 V
e. none of the above
51. Which transformation could take place at the anode of an electrochemical cell?
- a. Mn^{2+} to Mn
b. H_2O to O_2
c. H_2SO_4 to $\text{H}_2\text{S}_2\text{O}_3$
d. Br_2 to Br^-
e. none of the above

52. Calculate the value of E° for the reaction shown, given the standard reduction potentials:

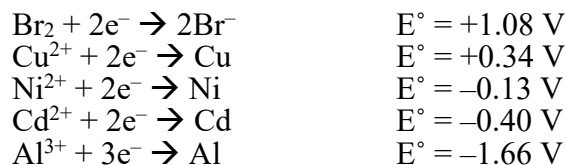


- a. 0.38 V
b. -0.38 V
c. 0.68 V
d. 1.84 V
53. The value of E° for the following reaction is 1.52 V. What is the value of E_{cell} with the concentrations shown?



- a. 1.40
b. 1.55
c. 1.49
d. 0.80

54. Given the following reduction potentials, which species would react with Cu^{2+} ?



- a. Br^- only
 - b. Cd and Al only
 - c. $\text{Cd}^{2+} + \text{Al}^{3+}$ only
 - d. Ni, Cd and Al
55. Molten PbCl_2 is subjected to electrolysis in order to form elemental lead and chlorine. Which of the following is false?
- a. Elemental lead metal is formed and deposited at the cathode
 - b. Elemental chlorine gas is formed at the cathode and bubbles away
 - c. Electrons flow from the anode to the cathode
 - d. none of the above
56. How many grams of Zn metal (65.4 g/mol) will be produced by passing a current of 6.6 amps through a solution of ZnI_2 for 45 minutes.
- a. 6.0 g
 - b. 0.111 g
 - c. 3.3 g
 - d. 6.6 g
 - e. none of the above
57. What particles are produced in the following reaction? $^{238}\text{U} + ^{16}\text{O} \rightarrow ^{140}\text{Ba} + ^{110}\text{Mo} + \underline{\hspace{2cm}}$
- a. 2 neutrons
 - b. 4 neutrons
 - c. 1 alpha particle
 - d. 2 alpha particles
 - e. 4 alpha particles
58. Fact: ^{14}O is unstable and radioactive. Is its n/p ratio too high or too low? In that case, which process could lead to stability? (Make sure that both parts of the answer are correct.)
- a. Its n/p ratio is too low. It could attain stability by electron capture or positron emission.
 - b. Its n/p ratio is too low. It could attain stability by beta emission.
 - c. Its n/p ratio is too high. It could attain stability by electron capture.
 - d. Its n/p ratio is too high. It could attain stability by beta emission.
 - e. Its n/p ratio is too high. It could attain stability by positron emission.

59. What is the missing product from this reaction: $^{28}\text{Al} \rightarrow ^{28}\text{Si} + \underline{\hspace{2cm}}$

- alpha particle
- beta ray
- positron
- gamma ray
- neutron

60. The half-life for radioactive element Z is 6 hours. If there is originally 50 g of sample Z, how much will be left after 15 hours?

- 8.8 g
- 11 g
- 24 g
- 16 g
- none of the above

Chem 210 Final Exam Answers Practive Version 1

Test1 Answers	Test2 Answers	Test3 Answers	Test4 Answers
1. B	16. B	31. A	46. C
2. C	17. A	32. C	47. B
3. B	18. B	33. C	48. C
4. E	19. E	34. C	49. A
5. C	20. C	35. D	50. C
6. C	21. A	36. C	51. B
7. B	22. C	37. A	52. D
8. C	23. B	38. D	53. C
9. A	24. C	39. C	54. D
10. C	25. B	40. D	55. B
11. C	26. B	41. A	56. A
12. A	27. A	42. D	57. C
13. A	28. D	43. C	58. A
14. B	29. D	44. B	59. B
15. B	30. B	45. B	60. A

General Chemistry II Jasperse Final Exam- Key Equations, Constants and Formulas

Test 1

$PV=nRT$	$R=0.0821 \text{ L}\cdot\text{atm}/\text{mol}\cdot\text{K}$	$1 \text{ atm} = 760 \text{ mm Hg}$	$K=273 + ^\circ\text{C}$
$1 \text{ mol} = 22.4 \text{ L (at STP)}$			
Formulas for First Order Reactions:	$kt = \ln ([A_o]/[A_t])$	$kt_{1/2} = 0.693$	

Tests 2 and 3

$[H^+][HO^-] = 1.00 \times 10^{-14}$	$\text{pH} = -\log[H^+]$	$\text{pZ} = -\log Z$ General definition for p of anything
$\text{pH} + \text{pOH} = 14$	$[H^+] = 10^{-\text{pH}}$	$x = \frac{-b \pm \sqrt{b^2 - 4ac}}{2a}$ Quadratic Equation
For weak acids alone in water:	$[H^+] = \sqrt{K_a x [WA]}$	$K_a = [H^+]^2/[HA]_{\text{init}}$
For weak bases alone in water:	$[OH^-] = \sqrt{K_b x [WB]}$	$K_b = [OH^-]^2/[Base]_{\text{init}}$
For conjugate acid/base pair:	$K_a K_b = 1.00 \times 10^{-14}$	
$\text{pH} = \text{p}K_a + \log[\text{base}]/[\text{acid}]$ For Buffer		
$\Delta G^\circ = G^\circ (\text{products}) - G^\circ (\text{reactants})$	$\Delta S^\circ = S^\circ (\text{products}) - S^\circ (\text{reactants})$	$\Delta G^\circ = \Delta H^\circ - T\Delta S^\circ$ (T in Kelvin)

Test 4

$E^\circ_{\text{cell}} = E^\circ_{\text{reduction}} + E^\circ_{\text{oxidation}}$	$\Delta G^\circ = -96.5nE^\circ_{\text{cell}}$
$E_{\text{cell}} = E^\circ - [0.0592/n]\log Q$	$\log K = nE^\circ/0.0592$
$\text{Mol } e^- = [A \cdot \text{time (sec)}]/96,500]$	$\text{time (sec)} = \text{mol } e^- \cdot 96,500/\text{current (in A)}$
$t = (t_{1/2}/0.693) \ln (A_o/A_t)$	$\ln (A_o/A_t) = 0.693 \cdot t / t_{1/2}$
$E = \Delta mc^2$ (m in kg, E in J, c = 3×10^8 m/s)	