

NOTE: This Version is Longer than the Real Test Will Be

Jasperse
Chem 360
~~Version 3~~
Test 2
Version 4
Answers

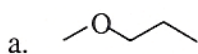
1. Predict the ¹H NMR spectra for the following molecules. Include predicted:

- chemical shifts
- integration
- splitting pattern (singlet, doublet, triplet, quartet, etc., multiplet)

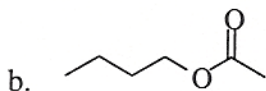
Example



3's, 2H, t
1's (or 2's), 2H, pentet (or multiplet)
3's, 2H, t



3's 3H s
3's 2H t
1's 2H m (or sextet)
1's 3H t



1's 3H t
1's 2H m (or sextet)
1's 2H p

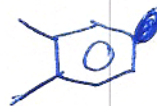
3's 2H t
2's 3H s

2. Assign the dimethylbenzene isomer for which the ¹³C NMR spectrum has:

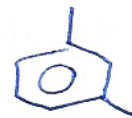
a. 3 signals (q, s, d)



b. 4 signals (q, s, d, d)



c. 5 signals (q, s, d, d, d)



3. Match the circled proton or protons in the following compounds with the correct chemical shift.

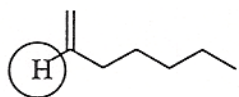
1.20

2.05

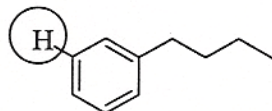
5.70

7.17

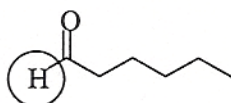
9.55



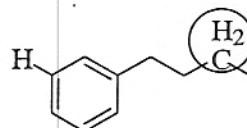
5.70



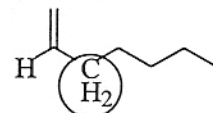
7.17



9.55



1.20



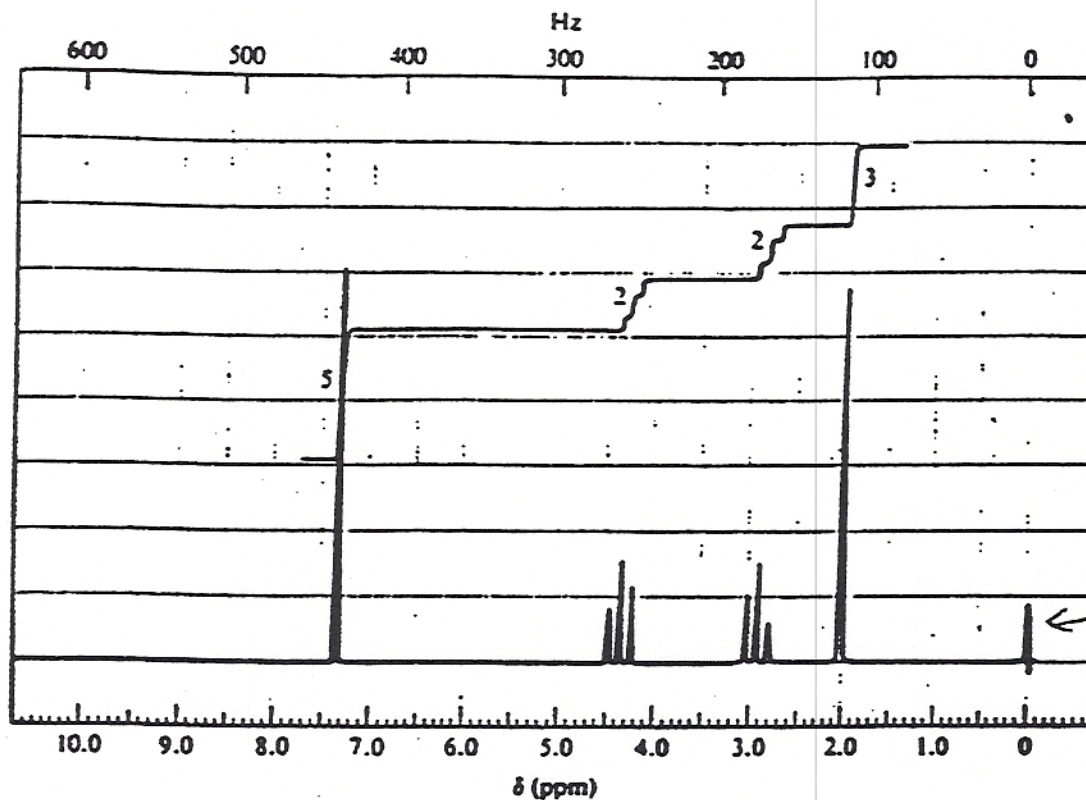
2.05

DRAW STRUCTURES FOR THE MOLECULES IN PROBLEMS 3-9



IR: 1740 (strong), 750 (strong), 700 (strong)

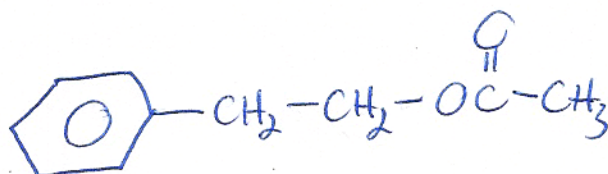
^{13}C NMR: 185 (s), 155 (s), 135 (d), 130 (d), 128 (d), 128 (d), ⁶⁵36 (t), 28 (t), 20 (q)



Note: Signal at zero is reference signal, nothing in actual molecule.

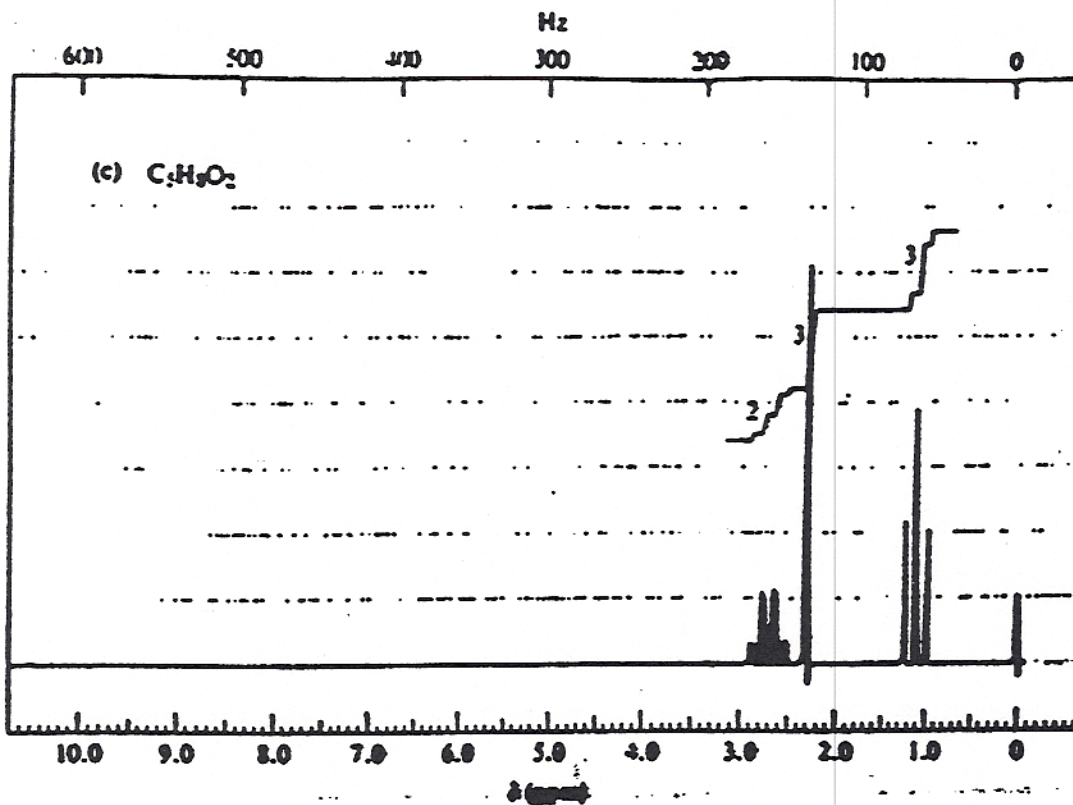
EU=5

IR \Rightarrow ester



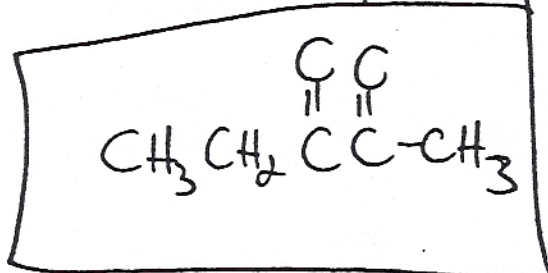


IR: 1720 (s), 1725 (s)



$EU=2$

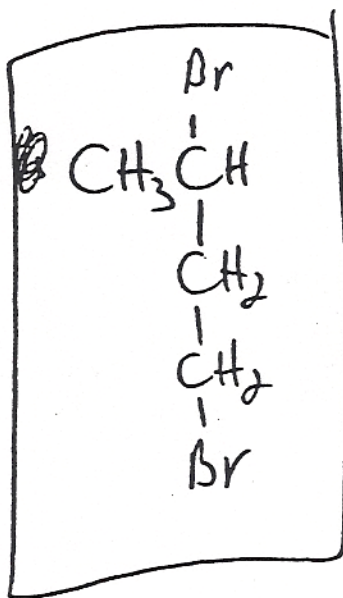
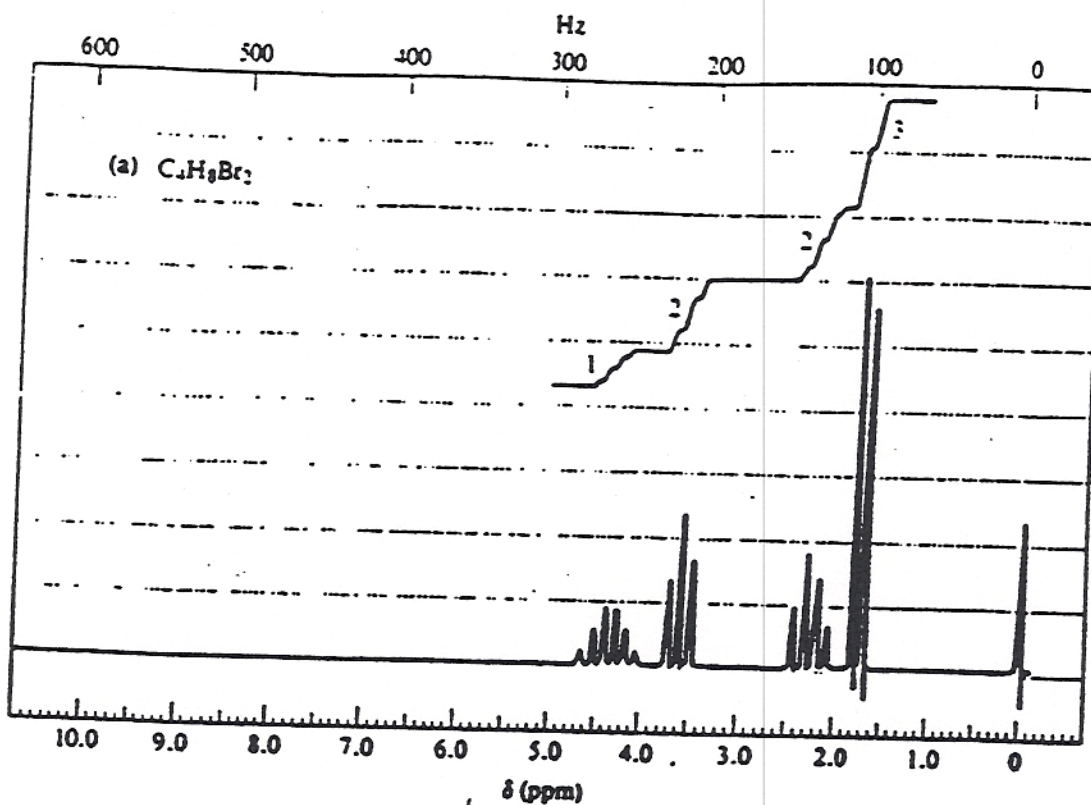
IR \Rightarrow 2 carbonyls



5. $C_4H_9Br_2$

IR: nothing interesting

^{13}C NMR: 45 (d), 37 (t), 24 (t), 18 (q)



6. $C_{11}H_{16}O$

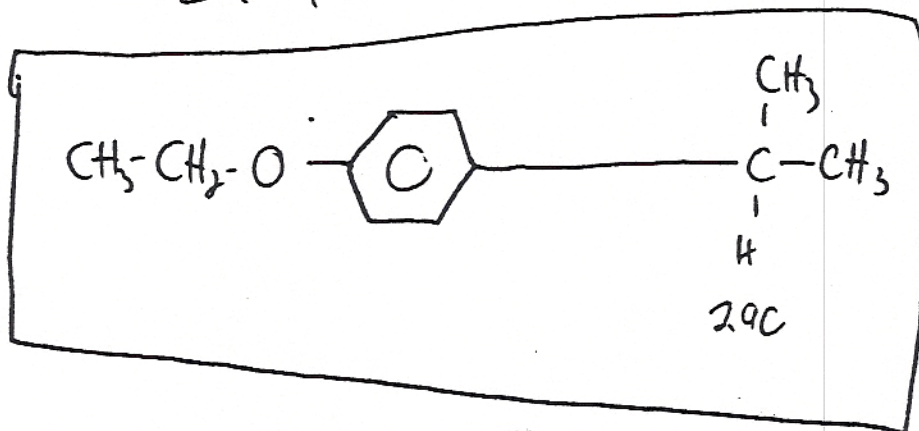
IR: 820 (strong)

^{13}C : 145 (s), 132 (s), 128 (d), 120 (d), 75 (t), 35 (d), 20 (q), 18 (q)

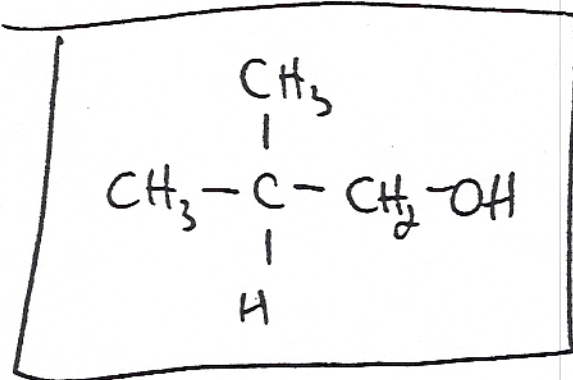
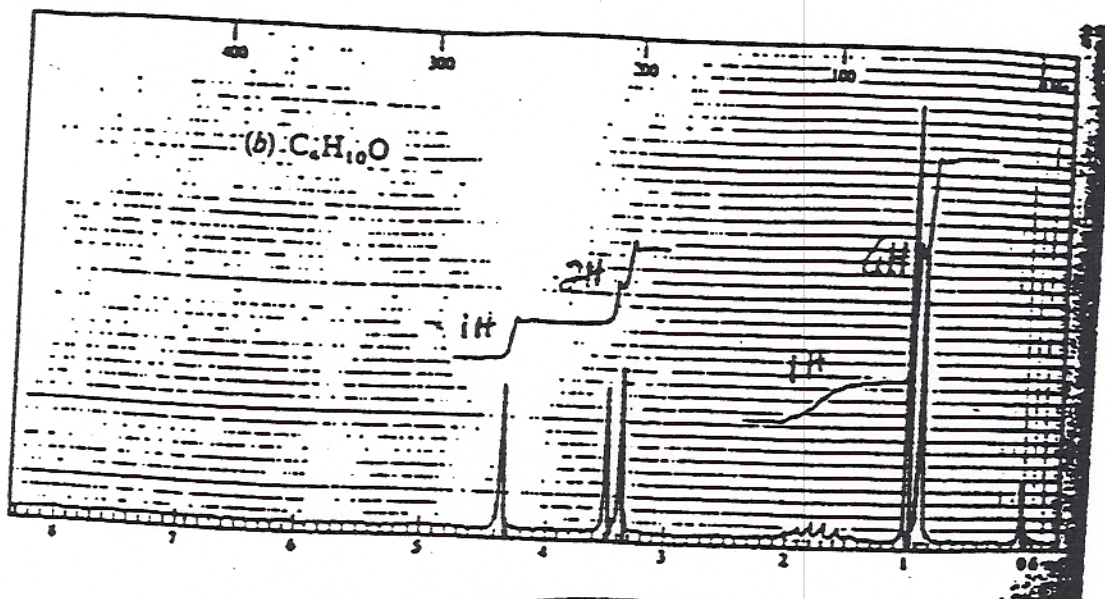
1H NMR: 1.25 (6H, d), 1.30 (3H, t), 2.90 (m, 1H), 4.15 (2H, q), 6.66 (2H, d), ~~6.97~~ (2H, d)

EU = 4

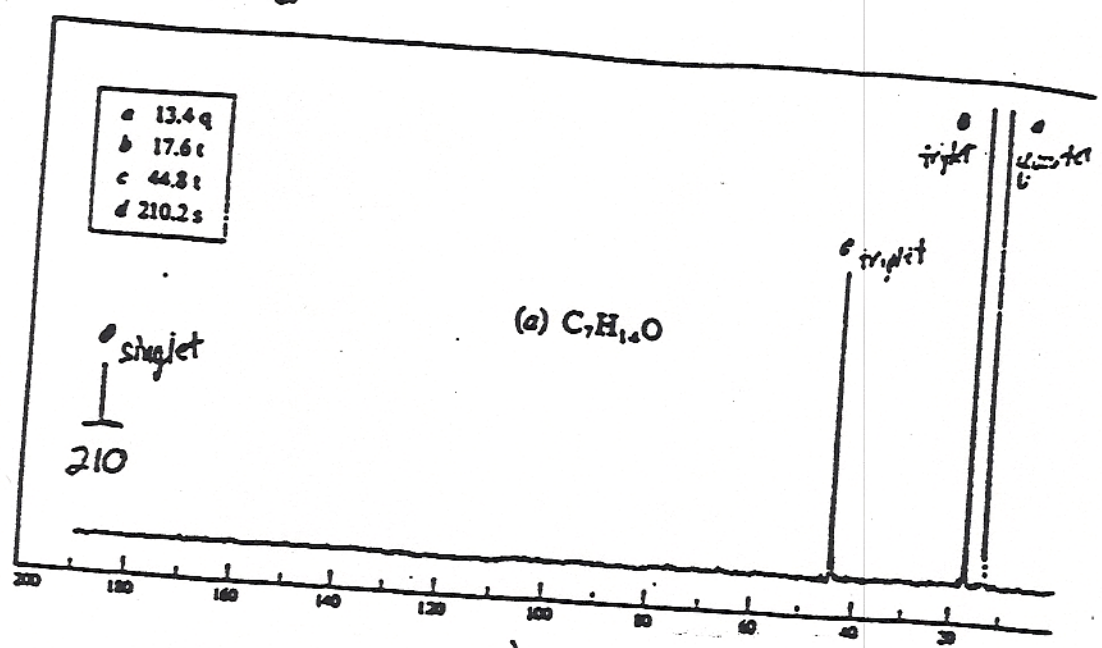
~~6.97~~ disabled



$C_4H_{10}O$



$C_7H_{14}O$
IR: 1710 (strong)



need symmetry!!

9

13. Show the structures for the following molecule, based on the spectroscopic information provided. (10 points)

$C_6H_{12}O_2$

IR: 1710; strong

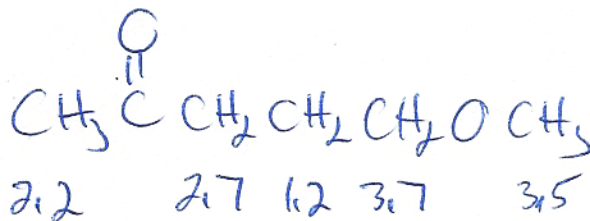
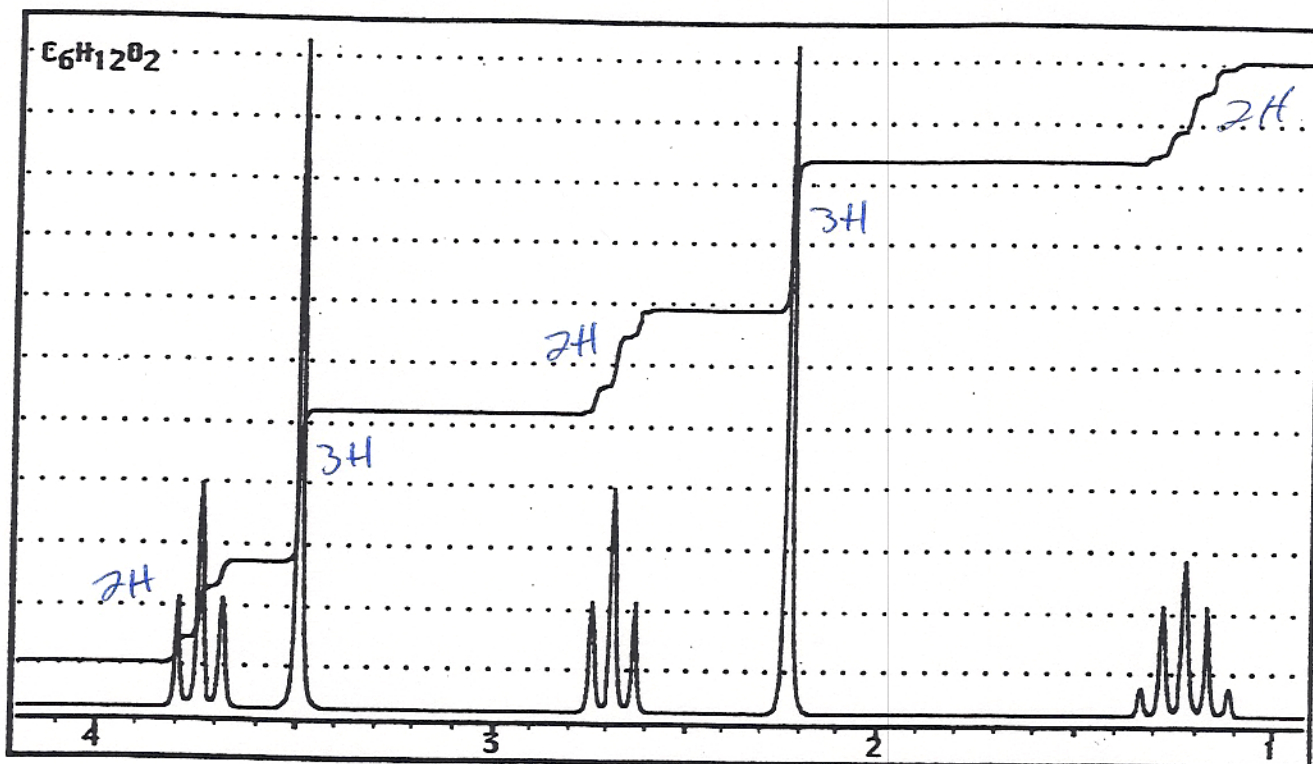
^{13}C NMR: 200 (s), 75 (t), 65 (q), 40 (t), 30 (t), 20 (q)

$EU=1$

$C=O$

no O-H

not ester



10

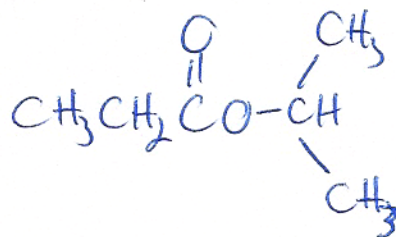
16. Show the structures for the following molecule, based on the spectroscopic information provided. (10 points)

$C_6H_{12}O_2$ IR: 1745, strong

^{13}C NMR: 20 (q), 30 (q), 48 (t), 78 (d), 185 (s)

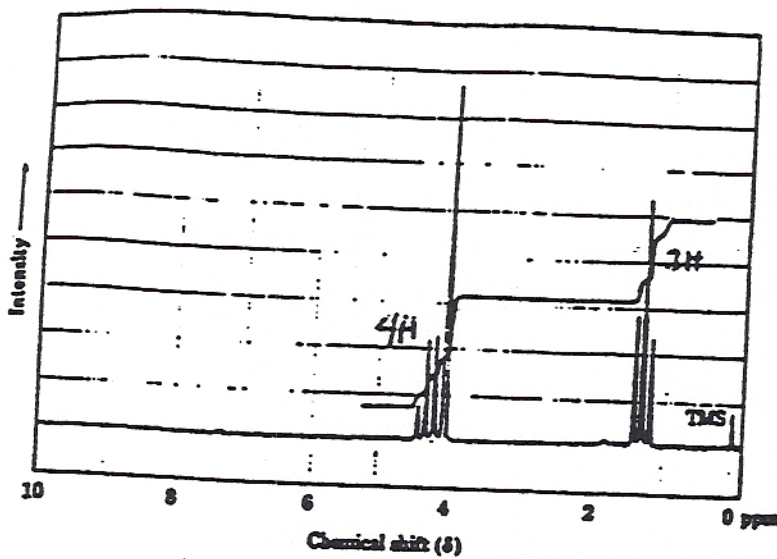
EU=1

$C=O$,
no OH
1745 \rightarrow ester

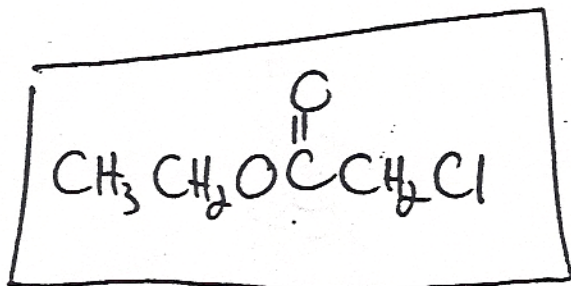




IR: 1740



EU = 1
IR \Rightarrow ester



2011